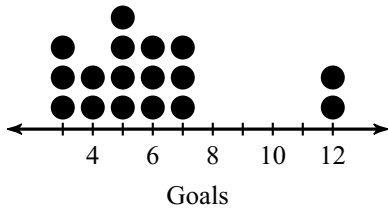


Interpreting Dot Plots

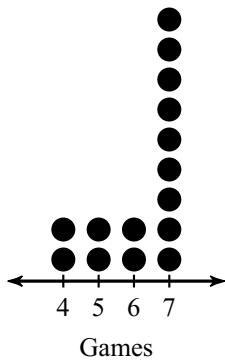
For each problem, use the dot plot to answer the question.

1) Goals in a Hockey Game



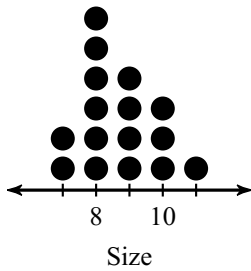
How many hockey games ended with 6 or more goals?

2) Games per World Series



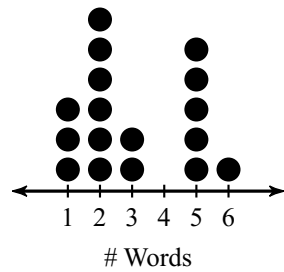
How many World Series had exactly 4 games?

3) Shoe Size



What percent of women wear shoes of size 9?

4) Length of Book Titles

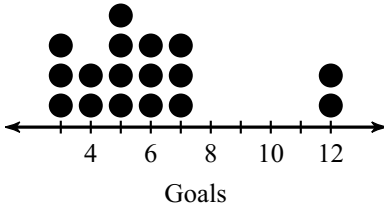


What percent of books have 3 words or more in their title?

Interpreting Dot Plots

For each problem, use the dot plot to answer the question.

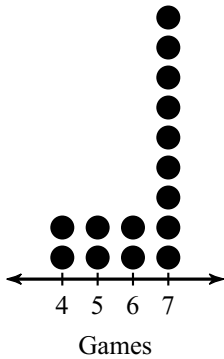
- 1) Goals in a Hockey Game



How many hockey games ended with 6 or more goals?

8

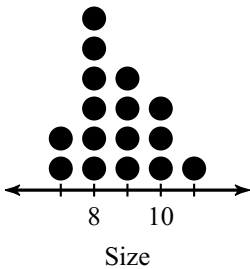
- 2) Games per World Series



How many World Series had exactly 4 games?

2

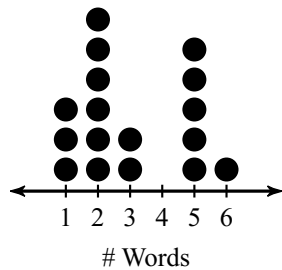
- 3) Shoe Size



What percent of women wear shoes of size 9?

25%

- 4) Length of Book Titles



What percent of books have 3 words or more in their title?

47.1%